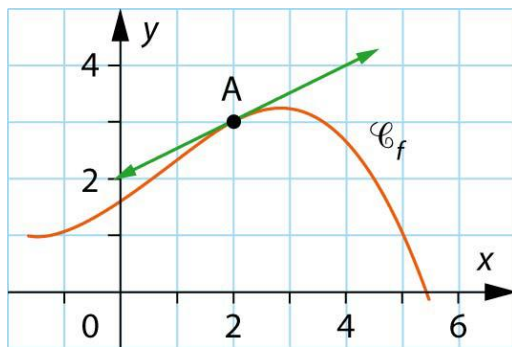
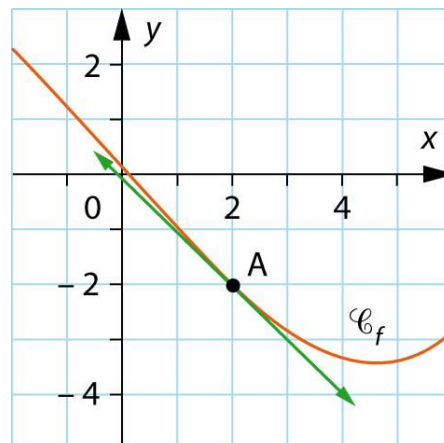


1. Lire graphiquement $f(2)$ et $f'(2)$.

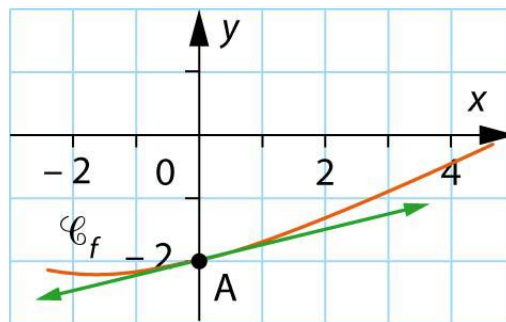
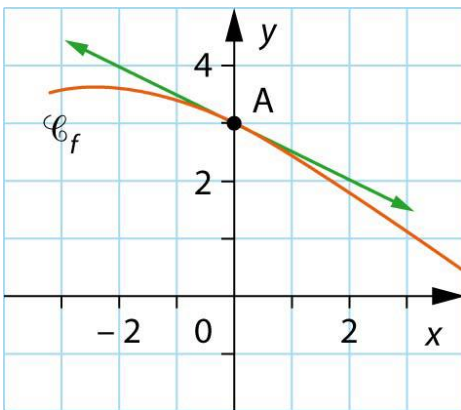
a.



b.



2. Lire graphiquement $f(0)$ and $f'(0)$.



3. Lire graphiquement $f(a)$ et $f'(a)$ pour les valeurs suivantes de a : -3 ; -1 ; 3 ; 6 .

